
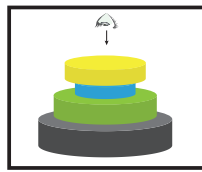
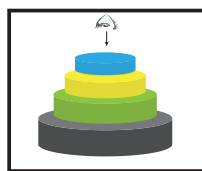

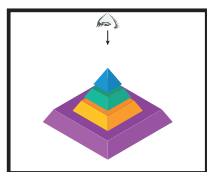

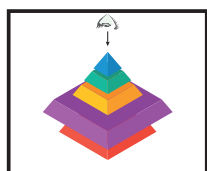


## Задание 1

Посмотри на пирамиды сверху и выбери правильные варианты раскладки.



1



2



3



4



1



2





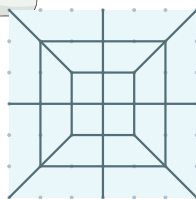


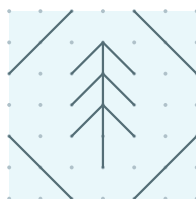

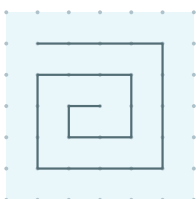


3



4

## Задание 2

Повтори узоры по точкам.



ТОМИК



КОША



## **Ответы**

### **Задание 1**

А-4

Б-4

В-1